


# Addition

Directions: Add write the answer in the circle.


$$3 + 3 =$$



$$4 + 1 =$$




$$2 + 1 =$$



$$2 + 2 =$$



$$1 + 1 =$$




$$6 + 2 =$$



$$5 + 3 =$$



$$7 + 3 =$$



$$8 + 1 =$$



$$9 + 0 =$$

